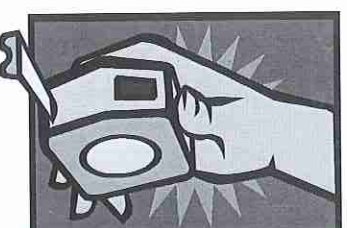


choice f

Level 3- Grade 3/4 Assessment Task

Measurement: Length, Area, Perimeter



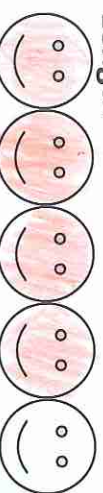
Name:

Object	What I used to measure: Circle your choice	Estimate Use appropriate units e.g. centimetres = cm, metres = m	Actual measurement
<u>Length</u> bat tennis court	metre strip <u>trundle wheel</u> measuring tape ruler	111	211m 9m
<u>Width</u> tiger turf	metre strip <u>trundle wheel</u> measuring tape ruler	160 cm	261 cm
<u>Height</u> red seat leg	metre strip trundle wheel <u>measuring tape</u> ruler	20 cm	17 cm
<u>Perimeter</u> brick on building wall	metre strip trundle wheel measuring tape <u>ruler</u>	20 cm	62 cm
<u>Area</u> rectangular card	metre strip trundle wheel measuring tape <u>ruler</u>	30 cm	32 cm squares

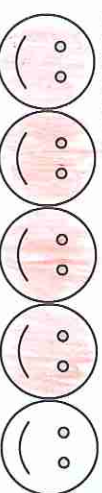
Self Assessment:

I understand how to *measure* and *record* in *centimetres* and *metres*

Length



Perimeter



Area

